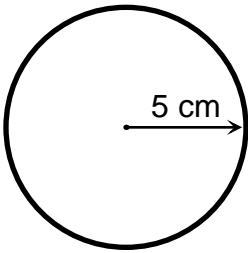
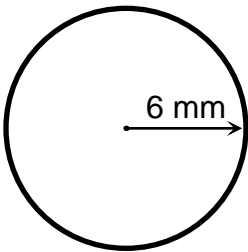
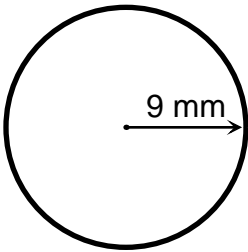


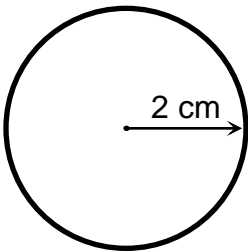


Find the circumference.





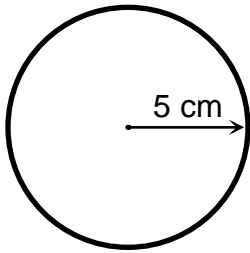






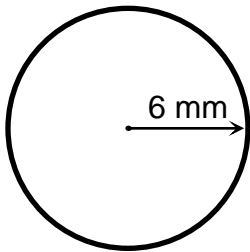
Answer Key

Find the circumference.



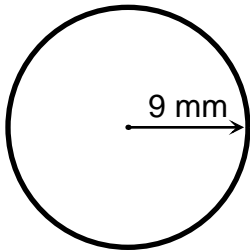
$$\text{circumference} = 2 \times 3.14 \times 5 \text{ cm}$$

$$\text{circumference} = 31.4 \text{ cm}$$



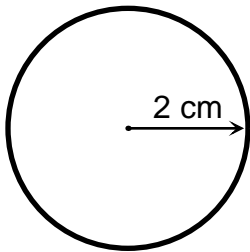
$$\text{circumference} = 2 \times 3.14 \times 6 \text{ mm}$$

$$\text{circumference} = 37.68 \text{ mm}$$



$$\text{circumference} = 2 \times 3.14 \times 9 \text{ mm}$$

$$\text{circumference} = 56.52 \text{ mm}$$

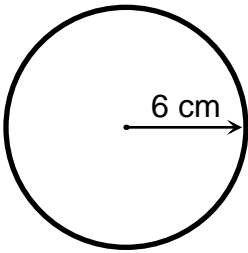


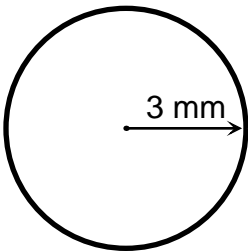
$$\text{circumference} = 2 \times 3.14 \times 2 \text{ cm}$$

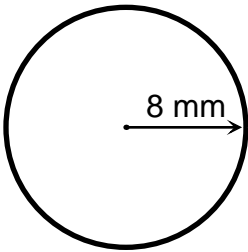
$$\text{circumference} = 12.56 \text{ cm}$$

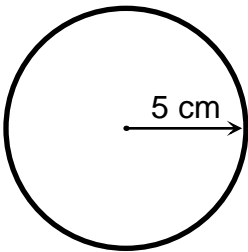


Find the circumference.





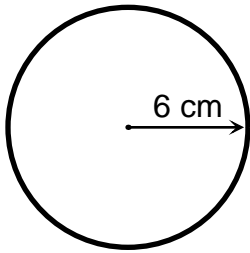






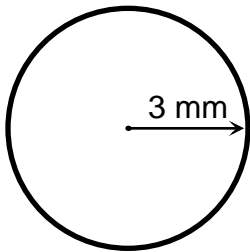
Answer Key

Find the circumference.



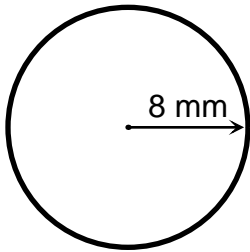
$$\text{circumference} = 2 \times 3.14 \times 6 \text{ cm}$$

$$\text{circumference} = 37.68 \text{ cm}$$



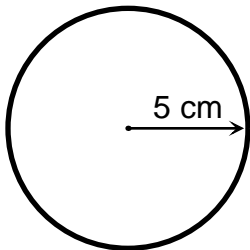
$$\text{circumference} = 2 \times 3.14 \times 3 \text{ mm}$$

$$\text{circumference} = 18.84 \text{ mm}$$



$$\text{circumference} = 2 \times 3.14 \times 8 \text{ mm}$$

$$\text{circumference} = 50.24 \text{ mm}$$

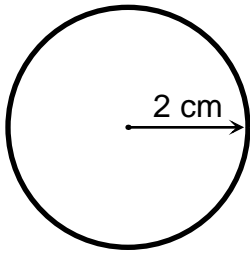


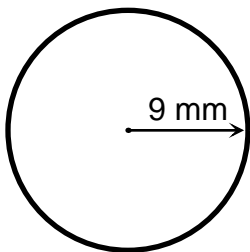
$$\text{circumference} = 2 \times 3.14 \times 5 \text{ cm}$$

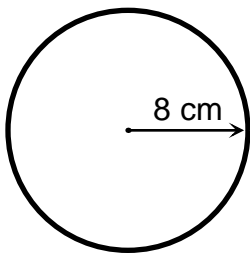
$$\text{circumference} = 31.4 \text{ cm}$$

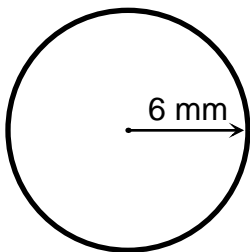


Find the circumference.





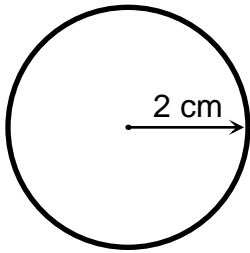






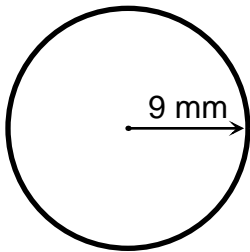
Answer Key

Find the circumference.



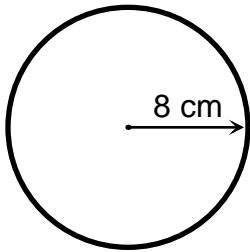
$$\text{circumference} = 2 \times 3.14 \times 2 \text{ cm}$$

$$\text{circumference} = 12.56 \text{ cm}$$



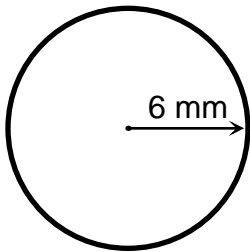
$$\text{circumference} = 2 \times 3.14 \times 9 \text{ mm}$$

$$\text{circumference} = 56.52 \text{ mm}$$



$$\text{circumference} = 2 \times 3.14 \times 8 \text{ cm}$$

$$\text{circumference} = 50.24 \text{ cm}$$

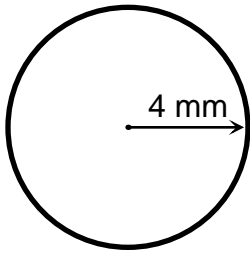


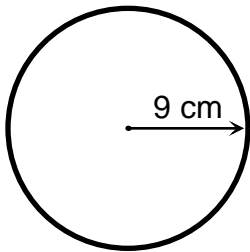
$$\text{circumference} = 2 \times 3.14 \times 6 \text{ mm}$$

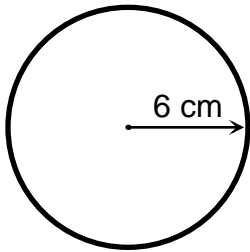
$$\text{circumference} = 37.68 \text{ mm}$$

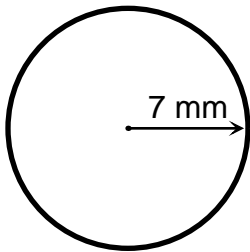


Find the circumference.





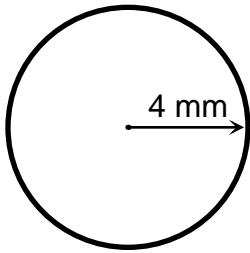






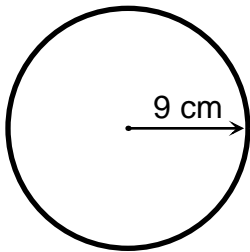
Answer Key

Find the circumference.



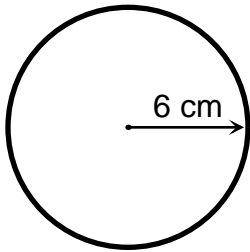
$$\text{circumference} = 2 \times 3.14 \times 4 \text{ mm}$$

$$\text{circumference} = 25.12 \text{ mm}$$



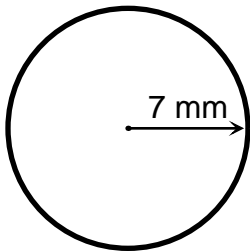
$$\text{circumference} = 2 \times 3.14 \times 9 \text{ cm}$$

$$\text{circumference} = 56.52 \text{ cm}$$



$$\text{circumference} = 2 \times 3.14 \times 6 \text{ cm}$$

$$\text{circumference} = 37.68 \text{ cm}$$

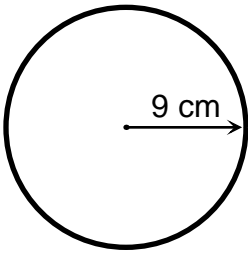


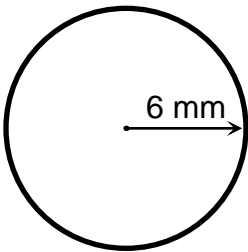
$$\text{circumference} = 2 \times 3.14 \times 7 \text{ mm}$$

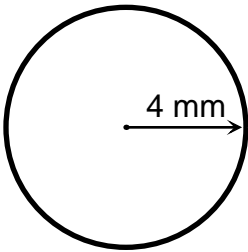
$$\text{circumference} = 43.96 \text{ mm}$$

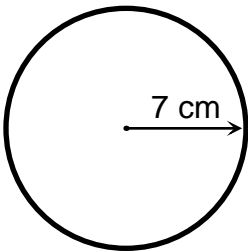


Find the circumference.





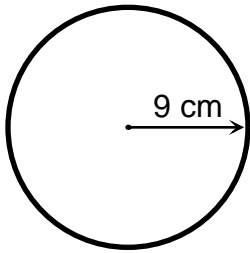






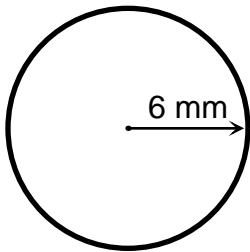
Answer Key

Find the circumference.



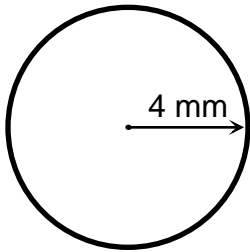
$$\text{circumference} = 2 \times 3.14 \times 9 \text{ cm}$$

$$\text{circumference} = 56.52 \text{ cm}$$



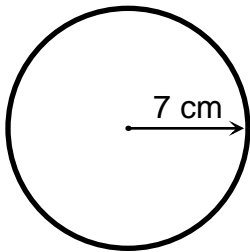
$$\text{circumference} = 2 \times 3.14 \times 6 \text{ mm}$$

$$\text{circumference} = 37.68 \text{ mm}$$



$$\text{circumference} = 2 \times 3.14 \times 4 \text{ mm}$$

$$\text{circumference} = 25.12 \text{ mm}$$

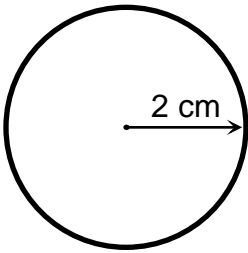


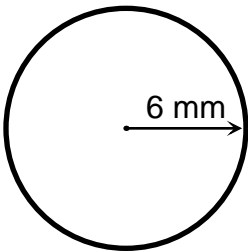
$$\text{circumference} = 2 \times 3.14 \times 7 \text{ cm}$$

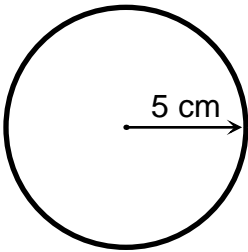
$$\text{circumference} = 43.96 \text{ cm}$$

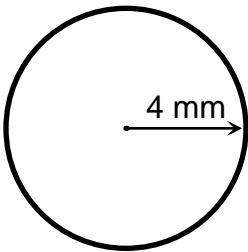


Find the circumference.





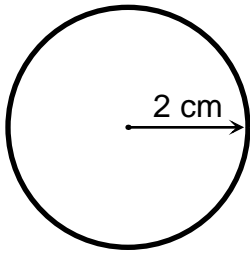






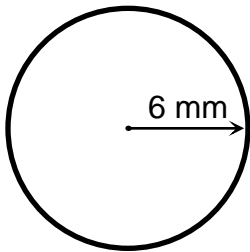
Answer Key

Find the circumference.



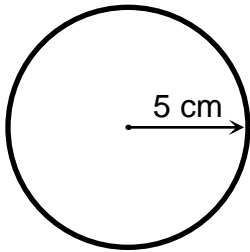
$$\text{circumference} = 2 \times 3.14 \times 2 \text{ cm}$$

$$\text{circumference} = 12.56 \text{ cm}$$



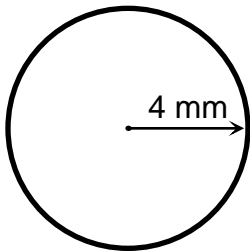
$$\text{circumference} = 2 \times 3.14 \times 6 \text{ mm}$$

$$\text{circumference} = 37.68 \text{ mm}$$



$$\text{circumference} = 2 \times 3.14 \times 5 \text{ cm}$$

$$\text{circumference} = 31.4 \text{ cm}$$



$$\text{circumference} = 2 \times 3.14 \times 4 \text{ mm}$$

$$\text{circumference} = 25.12 \text{ mm}$$



Maths = standardised Children = **unique**

**Personalised online maths tutoring that goes
beyond practice and builds your child's
confidence at school**

Enrol today



Let's solve this 