





Learning Objective: To find the area of various shapes by counting squares

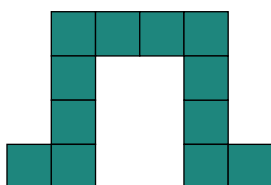
Find the area of each shapes by counting the squares.




1  = 1 cm²



Area = cm²



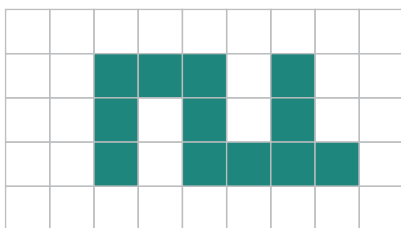
Area = cm²



Area = cm²


Complete the questions below.

If the area of each square is 1 cm², count the squares to find the area of each figure.




Area = cm²

If the area of each square is 1 cm², count the squares to find the area of each figure.



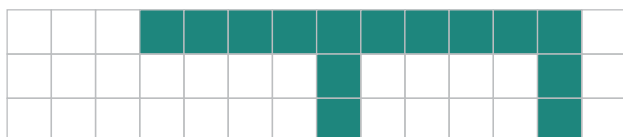
Area = cm²

If the area of each square is 1 cm², count the squares to find the area of each figure.




Area = cm²

If the area of each square is 1 cm², count the squares to find the area of each figure.



Area = cm²

If the area of each square is 1 cm², count the squares to find the area of each figure.





Area = cm²

 **Learning Objective:** To find the area of various shapes by counting squares

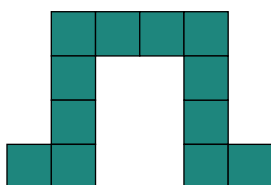
Find the area of each shapes by counting the squares.




1  = 1 cm²



Area = cm²



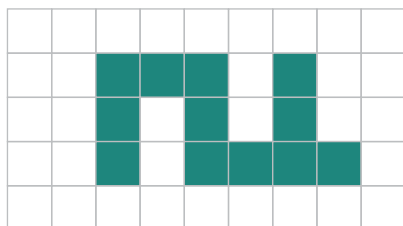
Area = cm²



Area = cm²


Complete the questions below.

If the area of each square is 1 cm², count the squares to find the area of each figure.




Area = cm²

If the area of each square is 1 cm², count the squares to find the area of each figure.



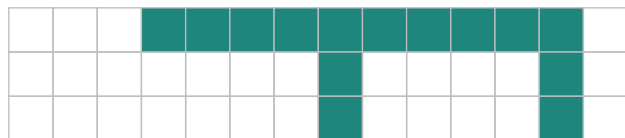
Area = cm²

If the area of each square is 1 cm², count the squares to find the area of each figure.




Area = cm²

If the area of each square is 1 cm², count the squares to find the area of each figure.



Area = cm²

If the area of each square is 1 cm², count the squares to find the area of each figure.



Area = cm²