

## Learning Objective: To calculate money using various strategies

Match each item with the correct amount of money.



Rocket Kit  
\$17.90



Experiment Kit  
\$15.80




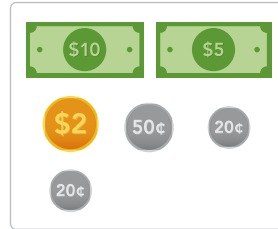
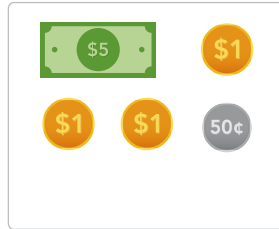
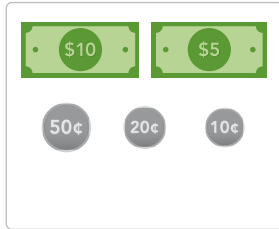
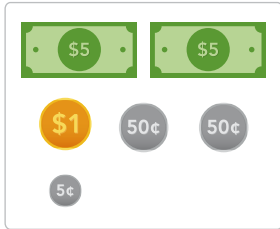
X-ray Glasses  
\$12.05



Alien Slime  
\$8.50



Herb Garden Kit  
\$12.50



Complete the questions below.

I want to buy 2 gifts for each  
my friends. How much do I  
spend on the gifts for each  
friend? Round the answer to  
the nearest 5 cents.



Pen Set  
\$5.45



Space Poster  
\$5.52




Mug  
\$9.05



Notebook  
\$4.22



Tote Bag  
\$6.55



Space Keychain  
\$11.34






Pen Set and Space Poster

Notebook and Tote Bag

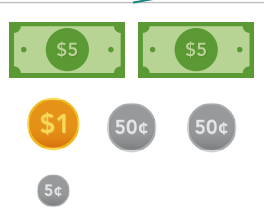
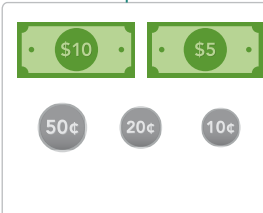



Space Keychain and Space Poster

## Learning Objective: To calculate money using various strategies

Match each item with the correct amount of money.

|                                                                                  |                                                                                   |                                                                                   |                                                                                    |                                                                                     |
|----------------------------------------------------------------------------------|-----------------------------------------------------------------------------------|-----------------------------------------------------------------------------------|------------------------------------------------------------------------------------|-------------------------------------------------------------------------------------|
|  |  |  |  |  |
| Rocket Kit<br>\$17.90                                                            | Experiment Kit<br>\$15.80                                                         | X-ray Glasses<br>\$12.05                                                          | Alien Slime<br>\$8.50                                                              | Herb Garden Kit<br>\$12.50                                                          |







  

|                                                                                   |                                                                                    |                                                                                    |                                                                                     |                                                                                      |
|-----------------------------------------------------------------------------------|------------------------------------------------------------------------------------|------------------------------------------------------------------------------------|-------------------------------------------------------------------------------------|--------------------------------------------------------------------------------------|
|  |  |  |  |  |
|-----------------------------------------------------------------------------------|------------------------------------------------------------------------------------|------------------------------------------------------------------------------------|-------------------------------------------------------------------------------------|--------------------------------------------------------------------------------------|

Complete the questions below.

I want to buy 2 gifts for each my friends. How much do I spend on the gifts for each friend? Round the answer to the nearest 5 cents.



|                                                                                     |                                                                                      |                                                                                       |
|-------------------------------------------------------------------------------------|--------------------------------------------------------------------------------------|---------------------------------------------------------------------------------------|
|  |  |  |
| Pen Set<br>\$5.45                                                                   | Space Poster<br>\$5.42                                                               | Mug<br>\$9.05                                                                         |
|  |  |  |
| Notebook<br>\$4.22                                                                  | Tote Bag<br>\$6.55                                                                   | Space Keychain<br>\$11.34                                                             |

|                                                                               |                                                                            |                                                                                       |
|-------------------------------------------------------------------------------|----------------------------------------------------------------------------|---------------------------------------------------------------------------------------|
| <p>Pen Set and Space Poster</p> $\$5.45 + \$5.42 = \$10.87$ $\approx \$10.90$ | <p>Notebook and Tote Bag</p> $\$4.22 + \$6.55 = \$10.77$ $\approx \$10.80$ | <p>Space Keychain and Space Poster</p> $\$11.34 + \$5.42 = \$16.76$ $\approx \$16.80$ |
|-------------------------------------------------------------------------------|----------------------------------------------------------------------------|---------------------------------------------------------------------------------------|