

Learning Objective: To calculate money using various strategies

Match each item with the correct amount of money.



Rocket Kit
\$15.65



Experiment Kit
\$19.70



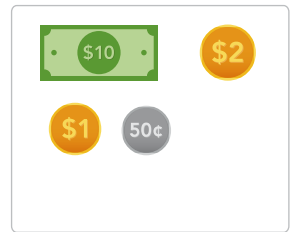
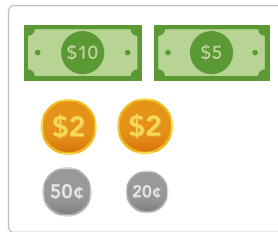
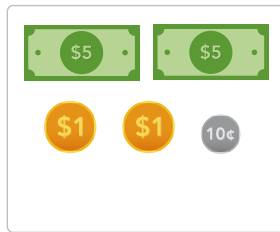
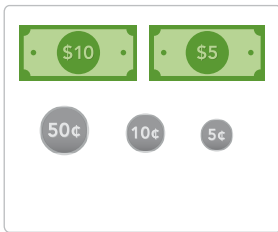
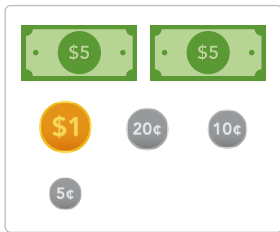
X-ray Glasses
\$11.35



Alien Slime
\$13.50



Herb Garden Kit
\$12.10



Complete the questions below.

I want to buy 2 gifts for each
my friends. How much do I
spend on the gifts for each
friend? Round the answer to
the nearest 5 cents.



Pen Set
\$3.78



Space Poster
\$7.62




Mug
\$6.02



Notebook
\$5.86



Tote Bag
\$9.45



Space Keychain
\$7.55






Tote Bag and Pen Set

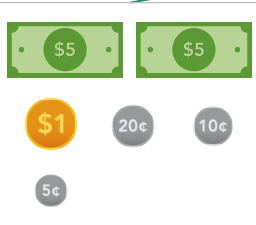
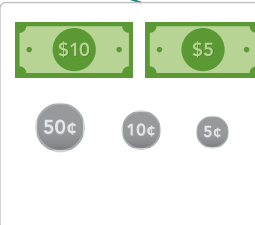
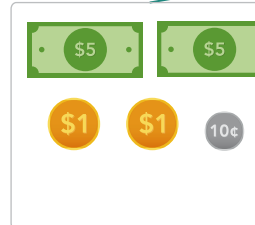
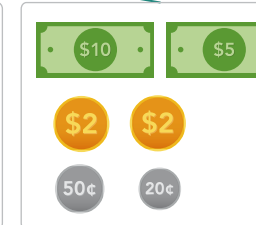

Space Poster and Mug

Notebook and Space Keychain

Learning Objective: To calculate money using various strategies

Match each item with the correct amount of money.







				
Rocket Kit \$15.65	Experiment Kit \$19.70	X-ray Glasses \$11.35	Alien Slime \$13.50	Herb Garden Kit \$12.10

				
---	--	--	---	--

Complete the questions below.

I want to buy 2 gifts for each my friends. How much do I spend on the gifts for each friend? Round the answer to the nearest 5 cents.



		
Pen Set \$3.78	Space Poster \$7.62	Mug \$6.02
		
Notebook \$5.86	Tote Bag \$9.45	Space Keychain \$7.55

<p>Tote Bag and Pen Set</p> $\$9.45 + \$3.78 = \$13.23$ $\approx \$13.20$	<p>Space Poster and Mug</p> $\$7.62 + \$6.02 = \$13.64$ $\approx \$13.60$	<p>Notebook and Space Keychain</p> $\$5.86 + \$7.55 = \$13.41$ $\approx \$13.40$
--	--	---