



Learning Objective: To find the perimeter of various shapes using addition.

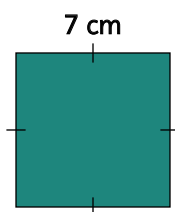
Find the perimeter of the following shapes. (Note: The shapes are not to scale)



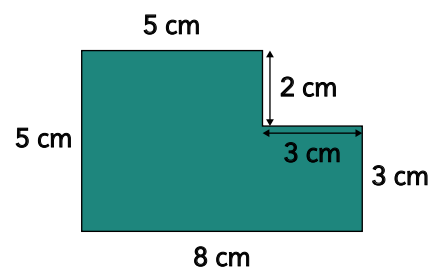
You can find the perimeter of each
shape by measuring the length of each
side and adding them together.



Perimeter = cm



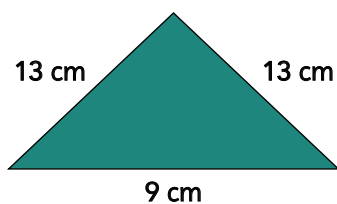
Perimeter = cm



Perimeter = cm

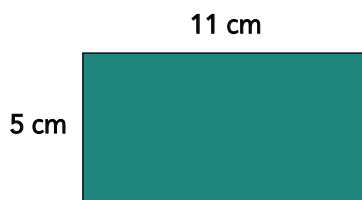
Complete the questions below.

Find the perimeter of the shape.



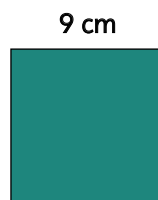
Perimeter = cm

Find the perimeter of the shape.



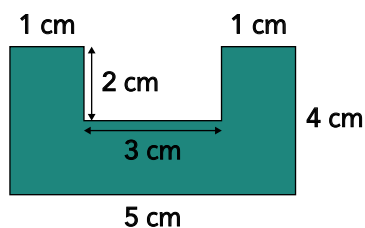
Perimeter = cm

Find the perimeter of the square.



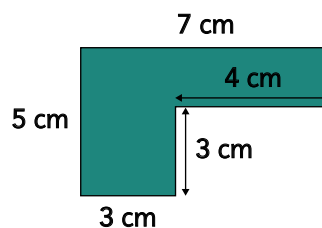
Perimeter = cm

Find the perimeter of the shape.



Perimeter =

Find the perimeter of the shape.



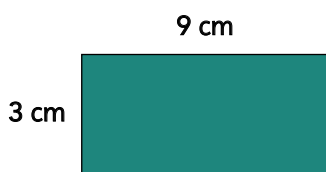
Perimeter =

 **Learning Objective:** To find the perimeter of various shapes using addition.

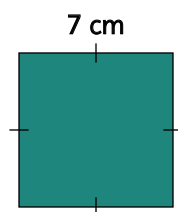
Find the perimeter of the following shapes. (Note: The shapes are not to scale)



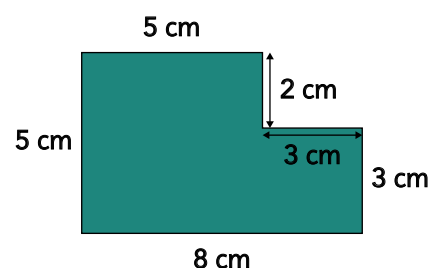
You can find the perimeter of each shape by measuring the length of each side and adding them together.



Perimeter = cm



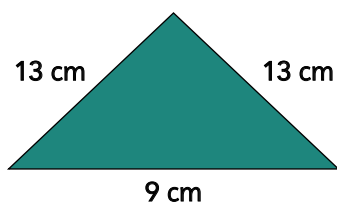
Perimeter = cm



Perimeter = cm

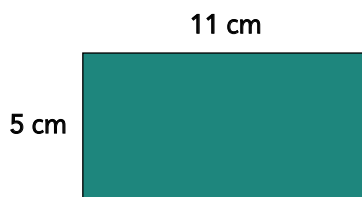
Complete the questions below.

Find the perimeter of the shape.



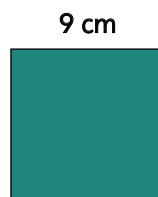
Perimeter = cm

Find the perimeter of the shape.



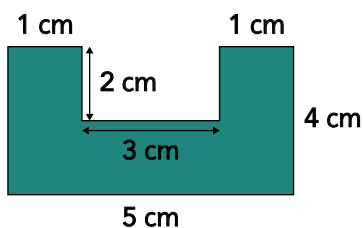
Perimeter = cm

Find the perimeter of the square.



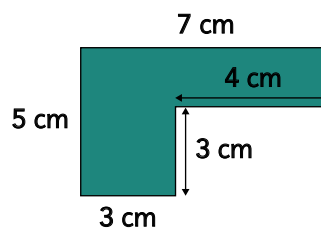
Perimeter = cm

Find the perimeter of the shape.



Perimeter =

Find the perimeter of the shape.



Perimeter =