




Learning Objective: To calculate fractions of a collection

Represent each fraction by shading part of the group of objects.


You can start
by finding 1
part of the
collection e.g.
find $\frac{1}{6}$ before
finding $\frac{3}{6}$.




$\frac{2}{3}$ of 18




$\frac{2}{4}$ of 16




$\frac{4}{5}$ of 35




$\frac{3}{4}$ of 20



$\frac{5}{7}$ of 42




$\frac{1}{4}$ of 24



Complete the questions below.

What fraction of this collection
is shaded?




$\frac{1}{5}$

$\frac{5}{15}$

$\frac{1}{4}$

What fraction of this collection
is shaded?




$\frac{2}{3}$

$\frac{3}{4}$

$\frac{2}{6}$

What fraction of this collection
is shaded?



$\frac{1}{2}$

$\frac{2}{8}$

$\frac{4}{12}$

Calculate the fraction.

$\frac{1}{5}$ of 45 =

Calculate the fraction.

$\frac{1}{7}$ of 28 =

Calculate the fraction.

$\frac{1}{10}$ of 60 =




Learning Objective: To calculate fractions of a collection

Represent each fraction by shading part of the group of objects.


You can start
by finding 1
part of the
collection e.g.
find $\frac{1}{6}$ before
finding $\frac{3}{6}$.




$\frac{2}{3}$ of 18




$\frac{2}{4}$ of 16




$\frac{4}{5}$ of 35




$\frac{3}{4}$ of 20



$\frac{5}{7}$ of 42




$\frac{1}{4}$ of 24



Complete the questions below.

What fraction of this collection
is shaded?




$\frac{1}{5}$

$\frac{5}{15}$

$\frac{1}{4}$

What fraction of this collection
is shaded?




$\frac{2}{3}$

$\frac{3}{4}$

$\frac{2}{6}$

What fraction of this collection
is shaded?



$\frac{1}{2}$

$\frac{2}{8}$

$\frac{4}{12}$

Calculate the fraction.

$\frac{1}{5}$ of 45 = 9

Calculate the fraction.

$\frac{1}{7}$ of 28 = 4

Calculate the fraction.

$\frac{1}{10}$ of 60 = 6